
GEOGRAPHY

9696/21

Paper 2 Advanced Physical Options


May/June 2014

INSERT

1 hour 30 minutes

READ THESE INSTRUCTIONS FIRST

This Insert contains the Figures, the Table and the Photograph referred to in the questions.



This document consists of 4 printed pages.

Fig. 1 for Question 1

Position of the ITCZ and the mean pattern of winds in January and July

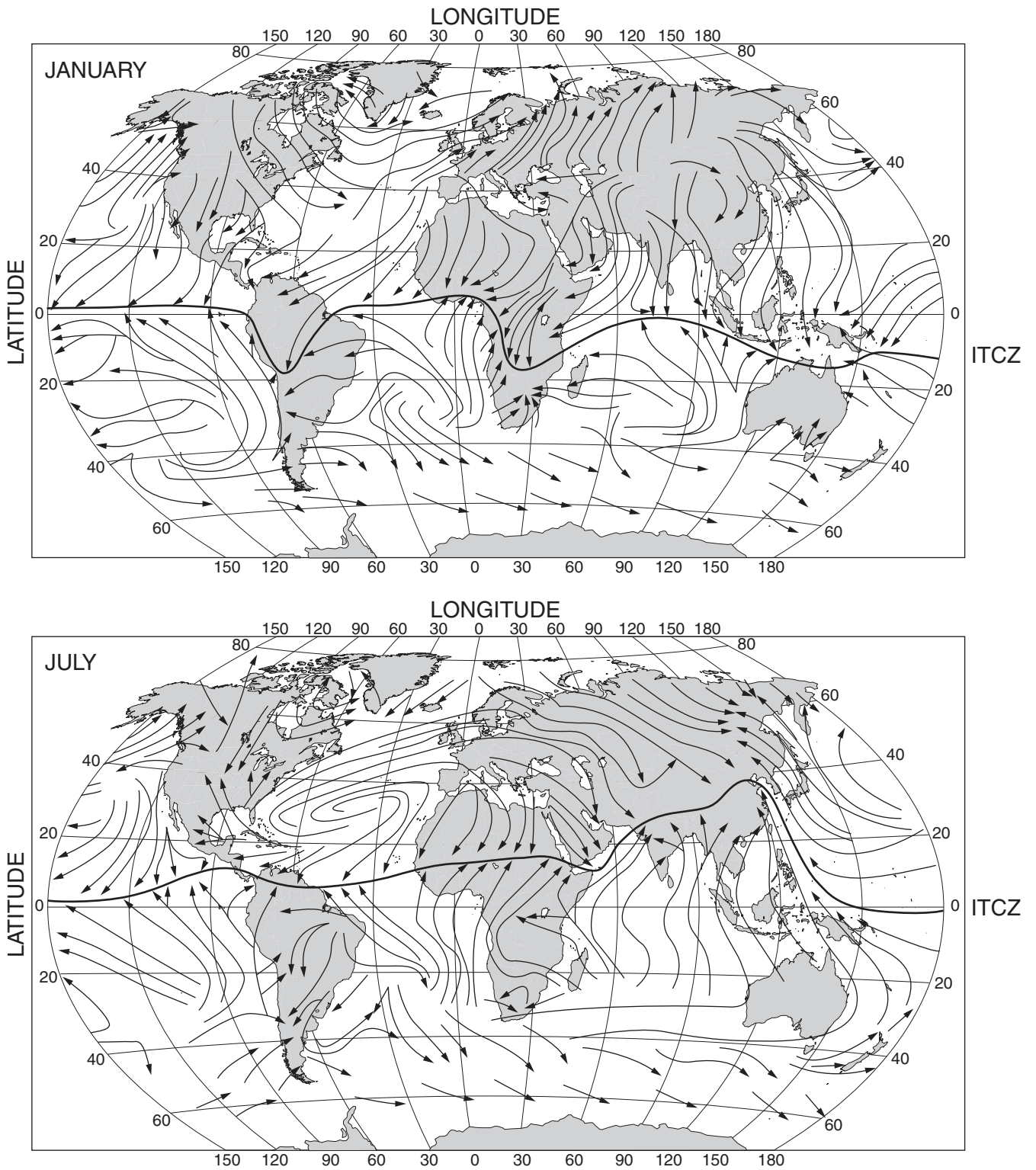


Fig. 2 for Question 3

Cross section of a beach – dune – saltmarsh complex

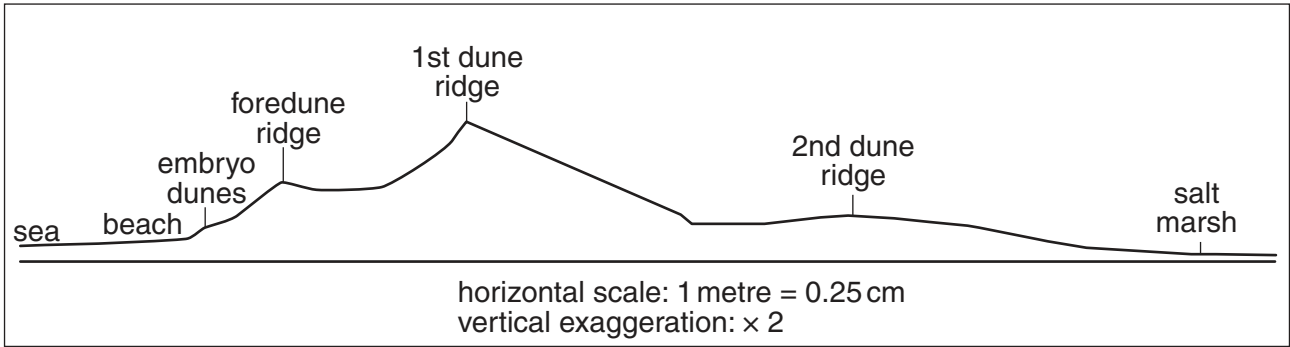


Table 1 for Question 5

A classification of tsunami in the Pacific Ocean

Intensity	Height of wave at coast (metres)	Description	Estimated frequency
1	0.5	Very slight wave, only measurable by instruments.	1 every 4 months
2	1	Slight wave noticeable on flat shores.	1 every 4 months
3	2	Large wave noticed by population. Some flooding and damage.	1 every 8 months
4	8	Very large wave. General flooding. Damage to harbours and quays, light buildings destroyed. People drowned.	1 every 3 years
5	16	Huge waves, destruction of all types of coastal buildings. Flooding to great depths and distances. Damage to large ships. Many deaths.	1 every 10 years

Photograph A for Question 7

Some landforms in a hot arid area



Copyright Acknowledgements:

Question 1 Fig. 1 © P Smithson, K Addison & K Atkinson; *Fundamentals of The Physical Environment*; Routledge; 2002; ISBN: 0415232937.
Question 3 Fig. 2 © Michael Raw; *AS/A-level Geography Exam Revision Notes*; Philip Allan; 2000; ISBN 0860034267.
Question 7 Photograph A © <http://wallpicshd.com/grand-canyon-hd-wallpaper-landscapes.html>

Permission to reproduce items where third-party owned material protected by copyright is included has been sought and cleared where possible. Every reasonable effort has been made by the publisher (UCLES) to trace copyright holders, but if any items requiring clearance have unwittingly been included, the publisher will be pleased to make amends at the earliest possible opportunity.

Cambridge International Examinations is part of the Cambridge Assessment Group. Cambridge Assessment is the brand name of University of Cambridge Local Examinations Syndicate (UCLES), which is itself a department of the University of Cambridge.